


Applied Sciences

► Electricity and magnetism

Verifying the Lenz Law by measuring the electric current flowing through a coil created by an external magnetic field





Applied Sciences

Electricity and magnetism

Verifying the Lenz Law by measuring the electric current flowing through a coil created by an external magnetic field

Objective

Introduction and theory

Activity description

Resources and materials

Using the Labdisc

Experiment

Results and analysis

Conclusions

Activities for further application

Applied Sciences

▶ Electricity and magnetism

Verifying the Lenz Law by measuring the electric current flowing through a coil created by an external magnetic field

Objective



The purpose of this activity is to study the relationship between an electric current inside a conductor and an external magnetic field. The electric current will be measured by the Labdisc's electric current sensor.

Applied Sciences

▶ Electricity and magnetism

Verifying the Lenz Law by measuring the electric current flowing through a coil created by an external magnetic field

Introduction and theory



The aim of the introduction is to focus students on the lesson subject by refreshing acquired knowledge and asking questions which encourage research development. Key concepts from the theoretical framework applied by the students during the lesson are taught.

Introduction

Magnetic fields and electric current are closely connected. We can use an electric current flowing inside a motor coil to rotate the motor and convert electricity into a mechanical rotation; while on the other hand in a generator we rotate a coil inside a magnetic field to create electricity and produce current that will flow from the generator coil.

Applied Sciences

► Electricity and magnetism

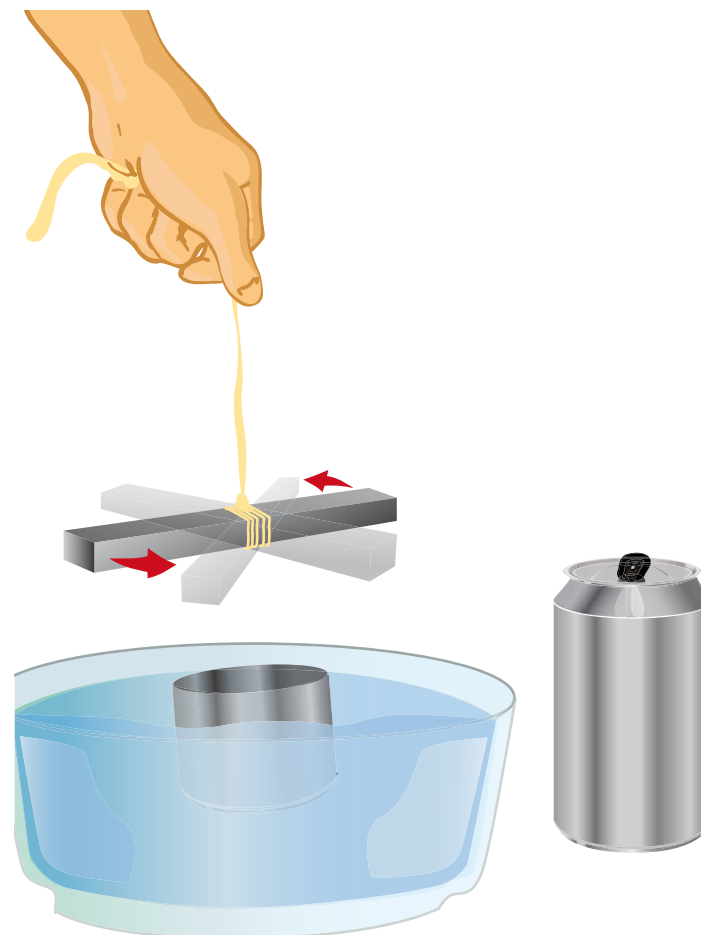
Verifying the Lenz Law by measuring the electric current flowing through a coil created by an external magnetic field

Introduction and theory



TRY THIS!

Carefully cut a beverage can approximately 5 cm from the base to obtain a small metal container. Place it on a deep plate full of water. Fix a big magnet to the end of a rope. Spin the magnet over the center of the can without touching the sides... What happens to the can?



Applied Sciences


Electricity and magnetism


Verifying the Lenz Law by measuring the electric current flowing through a coil created by an external magnetic field

Introduction and theory



At the end of this class you will be able to answer following questions and investigate!

 What do you think the magnets on the inside of headphones or loudspeakers are for? Explain

 In what situations have you used magnets or experimented with magnetism?

Carry out the experiment activity with your class so that at the end you'll be able to answer the following question.

 Can we induce an electric current using a magnet?

Applied Sciences

▶ Electricity and magnetism

Verifying the Lenz Law by measuring the electric current flowing through a coil created by an external magnetic field

Introduction and theory



Theoretical

In physics, electric current is a flow of charge through a given point of space, in a specific time period. The point of space is determined by an arbitrary reference point. Historically, electric current was first studied by investigating how electric charge transfers between two objects. The object where charged using friction or induction methods.

In 1800 the Italian, Alessandro Volta built the first electric battery. The Dane, Christian Oersted, used Volta's battery when he discovered by accident in 1820 that there is a relationship between electric current and magnetism. He observed how the needle in a compass moved when it was close to a conductor cable where electricity was passing through.

Applied Sciences

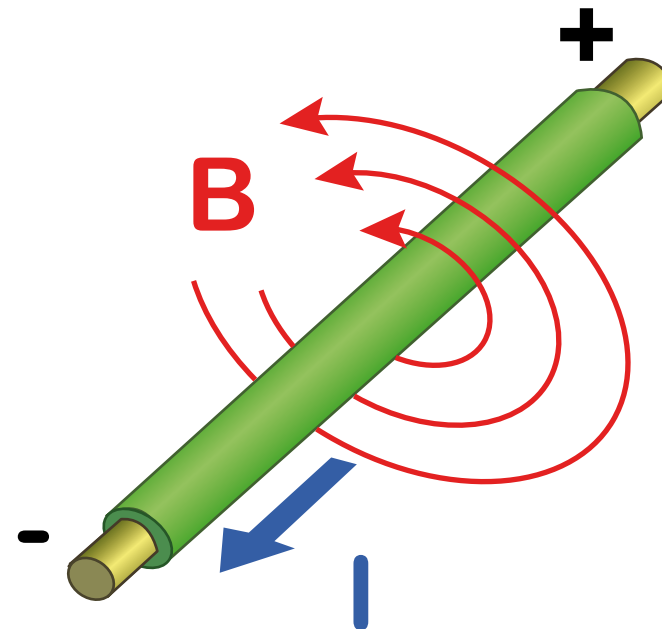
▶ Electricity and magnetism

Verifying the Lenz Law by measuring the electric current flowing through a coil created by an external magnetic field

Introduction and theory



This accident moved him to write that “all electric current or flow of charge causes a magnetic field around the path of the conductor, whose magnitude is inversely proportional to the distance between the observer and the electric current”. Furthermore, the effect of a magnetic field can be amplified and transmitted through a ferromagnetic material (a material that can turn into a magnet if it is exposed to a magnetic field). Some examples of ferromagnetic elements are iron (Fe), cobalt (Co) and nickel (Ni).



Applied Sciences

▶ Electricity and magnetism

Verifying the Lenz Law by measuring the electric current flowing through a coil created by an external magnetic field

Introduction and theory



The expression for a magnetic field B caused by an electric current is:

$$B = \frac{I}{2\pi \cdot r} \mu_0$$

Where:

B = magnetic field

I = electric current

r = radial distance to the observer

μ_0 = magnetic permeability in free space

Starting from previous discoveries, in 1831 the Englishman, Michael Faraday made a new discovery. He found out that in the same way that charges in motion cause an electric field, a variation in the magnetic field also induces a force on the free charges inside a conductor. This force is called electromotive force or EMF, and drives the electric current to pass through the conductor. Therefore, electric current may be induced by the movement of a magnet in a certain time period.

Applied Sciences

► Electricity and magnetism

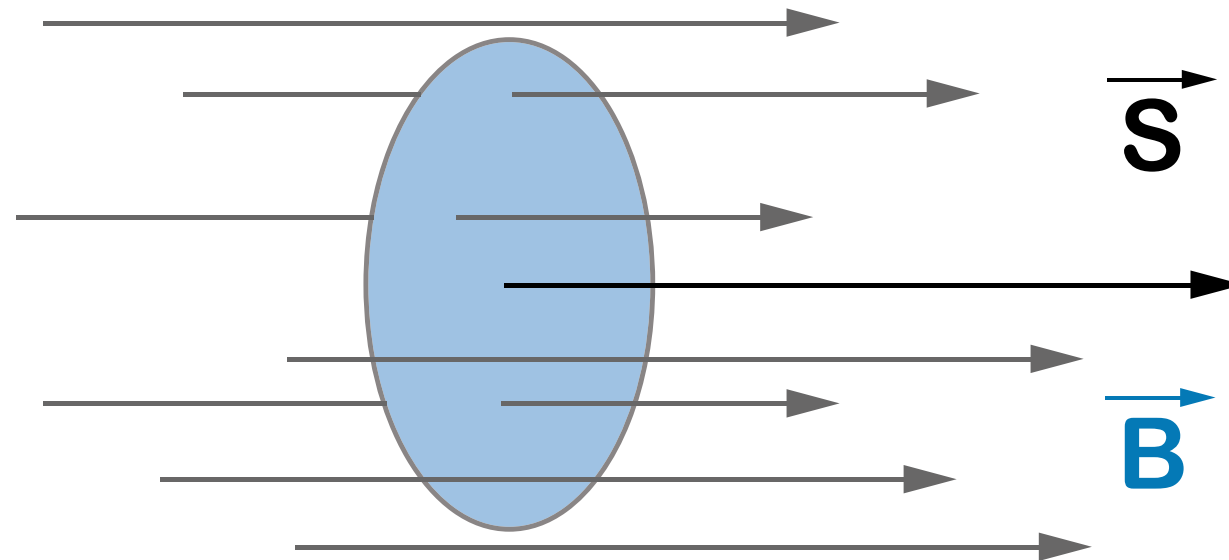
Verifying the Lenz Law by measuring the electric current flowing through a coil created by an external magnetic field

Introduction and theory



Two years later, the German, Heinrich Lenz proved that “electromotive force gives rise to a flow of charges whose magnetic field opposes its original cause, i.e. it opposes the original change in magnetic flux”. This may be expressed in Faraday’s Law of induction:

$$\mathcal{E} = -\frac{dB}{dt}$$



Applied Sciences

▶ Electricity and magnetism

Verifying the Lenz Law by measuring the electric current flowing through a coil created by an external magnetic field

Introduction and theory



Where:

\mathcal{E} = electromotive force (EMF)

t = time

B = magnitude of the magnetic field

S = area of the surface where the magnetic flux passes through (defined by the conductor wire)

Θ = angle between the magnetic field and the surface normal to S

Faraday's Law means that the electromotive force () is proportional to the change in magnetic flux in a given time period. The change of magnetic flux opposes the direction of the original magnetic field.

Applied Sciences

Electricity and magnetism

Verifying the Lenz Law by measuring the electric current flowing through a coil created by an external magnetic field

Introduction and theory



Now students are encouraged to raise a hypothesis which must be tested with an experiment.

?

What will happen inside a copper coil if you move a magnet relative to the coil?

Applied Sciences

▶ Electricity and magnetism

Verifying the Lenz Law by measuring the electric current flowing through a coil created by an external magnetic field

Activity description



Students will make a copper coil by coiling up a copper wire in their hands. They will then move a magnet several times relative to the coil to prove the Faraday and Lenz Laws

Warning!

Move all electronic devices away from the magnet to prevent them from being adversely affected by the magnetic field.

At the end of the class, they will build an electromagnet and observe how the magnetic field affects the orientation of a compass needle.

Applied Sciences


▶ Electricity and magnetism

Verifying the Lenz Law by measuring the electric current flowing through a coil created by an external magnetic field

Resources and materials



- 1 Labdisc
- 2 Red and black banana to banana connector cables
- Ten meters of 1 mm copper wire
- A neodymium magnet with at least 4000 gauss rating



Applied Sciences

▶ Electricity and magnetism

Verifying the Lenz Law by measuring the electric current flowing through a coil created by an external magnetic field

Using the Labdisc



a. Using the Labdisc

To collect measurements with the electric current sensor, the Labdisc must be set up by following these steps:

- 1 Open the GlobiLab software and turn on the Labdisc.
- 2 Click the Bluetooth icon in the bottom right corner of the GlobiLab screen.
Select the Labdisc you are using currently. Once the Labdisc has been recognized by the software the icon will change from a grey to blue color.

Applied Sciences

► Electricity and magnetism

Verifying the Lenz Law by measuring the electric current flowing through a coil created by an external magnetic field

Using the Labdisc



- 3 Click on the button to configure the Labdisc. Select the current sensor in the "Logger Setup" window. Enter "100/sec" for the sample frequency and "10000" for the number of samples.



Applied Sciences

▶ Electricity and magnetism

Verifying the Lenz Law by measuring the electric current flowing through a coil created by an external magnetic field

Using the Labdisc



- 4 Once you have finished the sensor configuration start measuring by clicking
- 5 Once you have finished measuring stop the Labdisc by clicking



Applied Sciences

▶ Electricity and magnetism

Verifying the Lenz Law by measuring the electric current flowing through a coil created by an external magnetic field

Experiment



The following steps explain how to perform the experiment:

- 1 Take the copper wire and coil it around your hand, leaving about 10 cm of wire at both ends free. Make sure the wire doesn't unwind by fixing it with masking tape
- 2 Connect the banana to banana cable to the Labdisc and to the ends of the copper wire as shown in the figure below
- 3 In the GlobiLab software click the RUN icon and observe the graph build on the screen

Applied Sciences

► Electricity and magnetism

Verifying the Lenz Law by measuring the electric current flowing through a coil created by an external magnetic field

Experiment



- 4 Start measuring, move the magnet two times inside and outside the coil. For the first time do it slowly, moving the magnet more quickly on the second time



- 5 Stop measuring

Applied Sciences



► Electricity and magnetism

Verifying the Lenz Law by measuring the electric current flowing through a coil created by an external magnetic field

Results and analysis



The following steps explain how to analyze the experiment results:

- 1 Observe the chart that appears on the screen once you have finished measuring
- 2 Identify the section of the graph where variations in the electric current were recorded. Once you have found them, press  to select the two points on the graph representing the beginning and end of the current pulses section
- 3 Press  and then press OK. The graph was trimmed to show only the “interesting section” of the current pulses.


Applied Sciences

▶ Electricity and magnetism

Verifying the Lenz Law by measuring the electric current flowing through a coil created by an external magnetic field

Results and analysis



- 4 Fit the scale to observe the variations in electric current displayed. To do this register the maximum and minimum values using the  button, and enter rounded values in the "Set Range" window by right-clicking the y axis on the chart.
- 5 Press and write notes on the graph specifying when the magnet was inside and outside the wire coil

Applied Sciences

Electricity and magnetism

Verifying the Lenz Law by measuring the electric current flowing through a coil created by an external magnetic field

Results and analysis



?

How do the results relate to your initial hypothesis? Explain

?

How would you explain the variations in electric current?

Applied Sciences

Electricity and magnetism

Verifying the Lenz Law by measuring the electric current flowing through a coil created by an external magnetic field

Results and analysis



?

What differences did you find between the electric current when the magnet was moving inside the coil and the electric current when the magnet was moving outside the coil?

?

When did you observe a larger current pulse – when the magnet was moving slowly or when it was moving faster? Explain

Applied Sciences

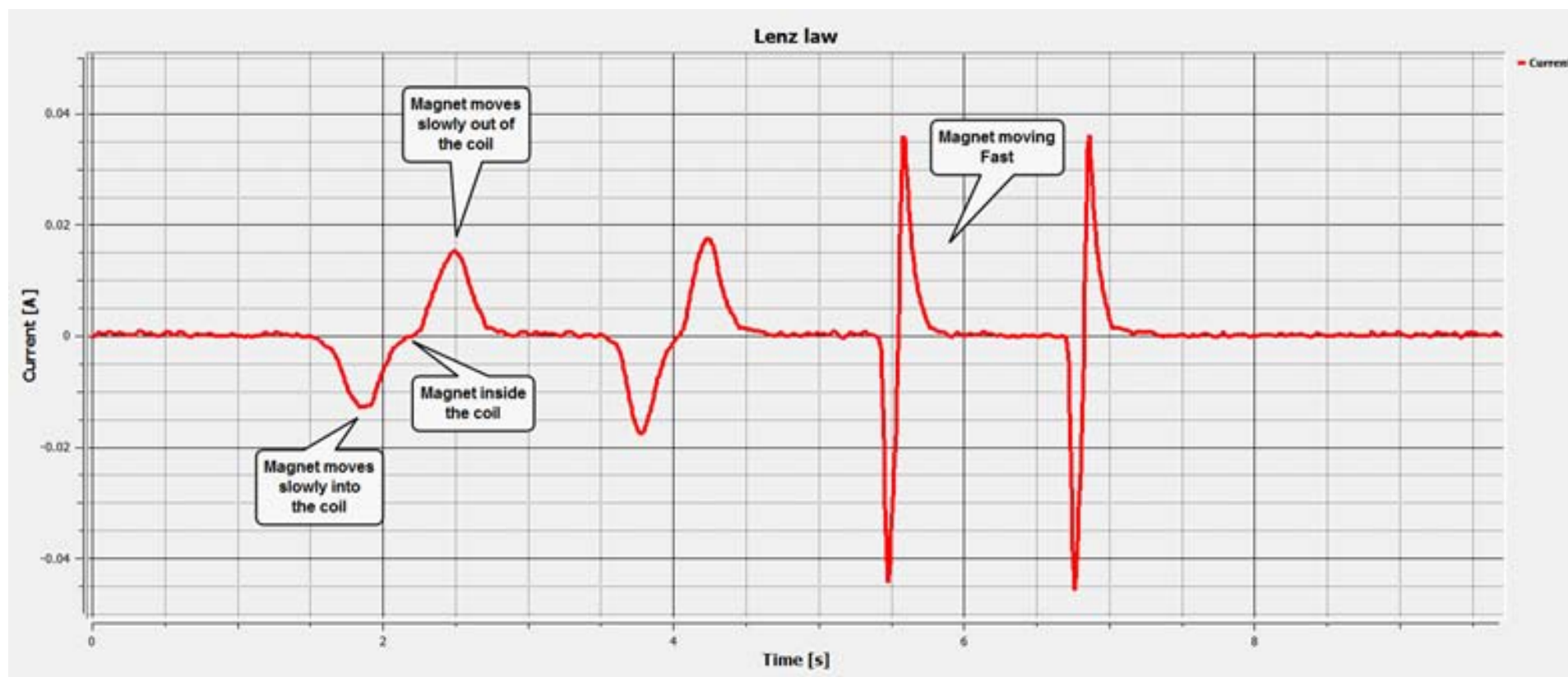
► Electricity and magnetism

Verifying the Lenz Law by measuring the electric current flowing through a coil created by an external magnetic field

Results and analysis



The graph below should be similar to the one the students came up with.



Applied Sciences

▶ Electricity and magnetism

Verifying the Lenz Law by measuring the electric current flowing through a coil created by an external magnetic field

Conclusions



Hereafter are presented some questions and answers which should be developed by the students in order to elaborate their conclusions.



How does the magnetic field inside the coil relate to the current recorded in the coil? Explain

Students should identify that the electric current is proportional to the CHANGE in the magnetic field. Thus when the magnet is moving fast in and out of the coil - the graph registers a higher pulse compared to a slow magnet movement. When the magnet doesn't move, even when it is inside the coil creating a high magnetic field, there will be no electric current.



What does the negative and positive sign of the electric current mean?

Students should point out that the sign represents the electrons' direction of flow and is independent of the current's magnitude.

Applied Sciences

▶ Electricity and magnetism

Verifying the Lenz Law by measuring the electric current flowing through a coil created by an external magnetic field

Conclusions



How is the sign of the current inside the copper wire related to the magnetic field of the magnet? Explain

Students should explain that according to the Lenz Law the electric current in the coil is opposite to the magnetic field creating it. Thus from the above recorded graph, students can clearly observe that when we insert the magnet into the coil, increasing the magnetic field, the current will be negative. Similarly, when the magnet is pulled out of the coil (magnetic field is decreased) the current will be positive.

Applied Sciences

► Electricity and magnetism

Verifying the Lenz Law by measuring the electric current flowing through a coil created by an external magnetic field

Activities for further application



The aim of this section is that the students can extrapolate the acquired knowledge during this class through the application of it in different contexts and situations. Furthermore, it is intended that students wonder and present possible explanations to the experimentally observed phenomena.

Further questions:



How would you explain the phenomenon observed during the first activity called “TRY THIS!”?

Students should infer that the motion of the beverage can is caused because of the action of a magnetic field on the fixed charges of the metal. Therefore the metal will move in an opposite direction than the current induced by the magnetic flux.

Applied Sciences

► Electricity and magnetism

Verifying the Lenz Law by measuring the electric current flowing through a coil created by an external magnetic field

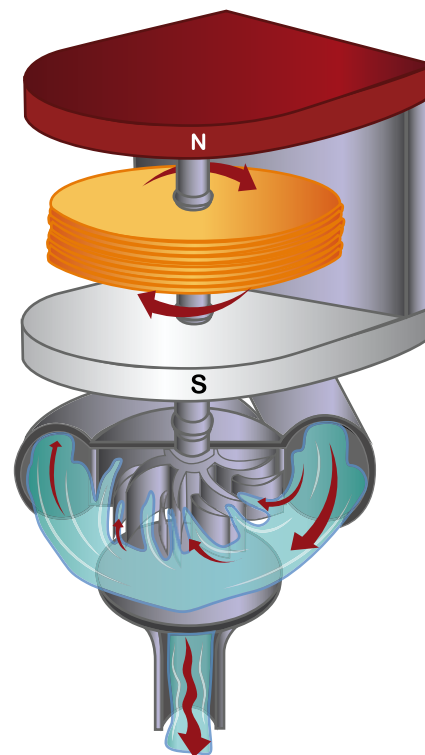
Activities for further application



?

How could you use the Faraday and Lenz Law to produce energy in a hydroelectric power plant? If you aren't familiar with the process, investigate it.

Students should point out that the Faraday and Lenz Law may be used in a hydroelectric power plant to produce energy because the movement of a magnet inside a copper coil (dynamo) induces electric current. Water that falls on sails produces a circular movement of the magnet.



Applied Sciences

► Electricity and magnetism

Verifying the Lenz Law by measuring the electric current flowing through a coil created by an external magnetic field

Activities for further application



Could you build an electromagnet with a copper wire, a battery and a piece of iron? Try it using the materials of the experiment.

Students should deduce that if they coil the copper wire around the piece of iron and connect the wire to a power supply, a magnetic field will appear. Since iron is a ferromagnetic material, the magnetic field will amplify and reach a high magnitude, depending on the electric current that passes through the conductor.



How do you think the orientation of a compass would be affected if you exposed it to an electromagnet? Prove your theory with the electromagnet you built for the previous question.

Students should point out that compass orientates according to the north pole of the natural magnetic field on our planet. If we expose the compass to a magnetic field other than the one of Earth, its orientation will change. We can prove this by coiling a copper wire around a piece of iron and connecting the end to a battery. Next we place the compass in front of the electromagnet and try connecting and disconnecting the wire to the battery. The orientation of the needle inside the compass will change depending on if it is orientated by the magnetic field of the planet or by the magnetic field of the electromagnet.

Applied Sciences

Electricity and magnetism


Verifying the Lenz Law by measuring the electric current flowing through a coil created by an external magnetic field

Activities for further application



What will happen to the direction of the needle if you switch the cables connected to the battery?

Students should point out that the direction of the needle's movement will change due to the change in the battery's polarity which then causes a change in the direction of the electric flow.



Pullman Academic
Learn and Become

